


Nom: _____

Dia: _____

TREBALLEM LES FORMES: El quadrat

1. Quants costats té un quadrat? Encercla el número correcte




1-2-3-4

Un quadrat

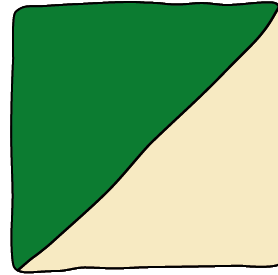
2. A la vida quotidiana hi han moltes coses quadrades. Per exemple:



Un regal



Un dau



UNA RAJOLA

3. Busca algun objecte quadrat i fes un dibuix:

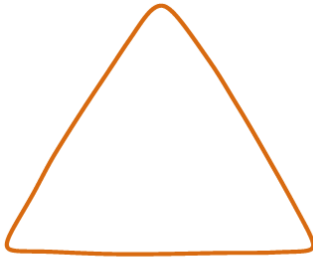
Un quadrat

Nom: _____

Dia: _____

TREBALLEM LES FORMES: El triangle


1. Quants costats té un quadrat? Encercla el número correcte



1-2-3-4

Un triangle

2. A la vida quotidiana hi han moltes coses quadrades. Per exemple:








Nom: _____

Dia: _____



MATEMÀTIQUES A CASA

Comptem rajoles!



1. Compta quantes rajoles hi ha a cada línia i escriu el número al costat



2. Quants quadrats veus en aquesta imatge?



3. Quants triangles veus en aquesta imatge?



4. Escriu els números que falten:








Nom: _____

Dia: _____

LA RAJOLA DE VELA

Pinta, retalla i combina





Museus d'Esplugues
de Llobregat

Can Tinturé

La Rajoleta

